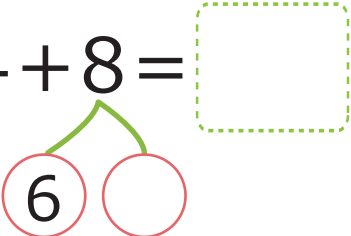
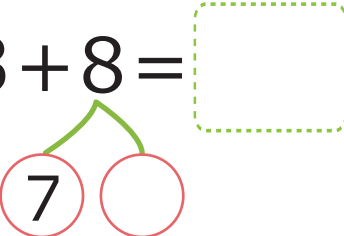
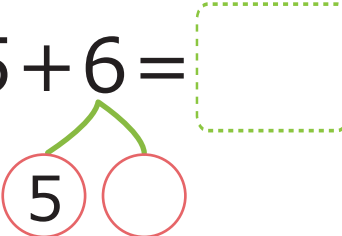

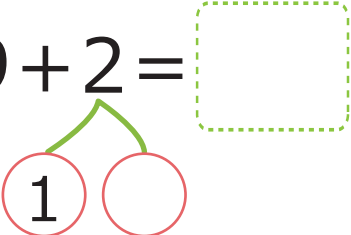


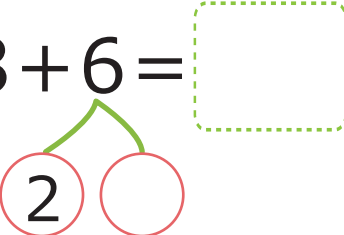
$$(1) 4 + 8 = \square$$


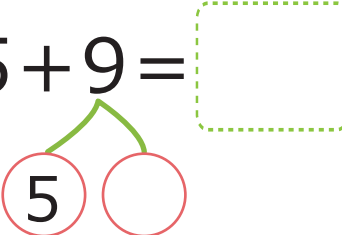
$$(5) 3 + 8 = \square$$


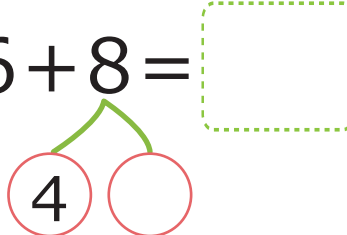
$$(9) 5 + 6 = \square$$


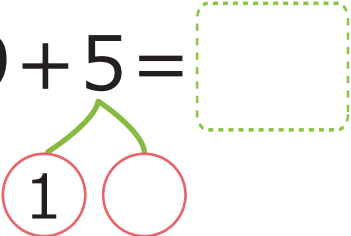
$$(13) 7 + 4 = \square$$


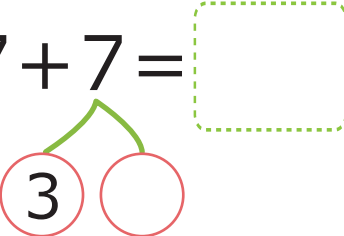
$$(2) 9 + 2 = \square$$


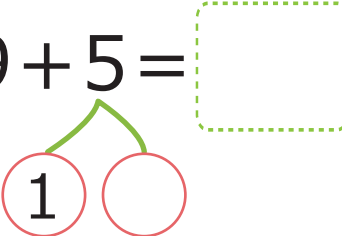
$$(6) 8 + 6 = \square$$


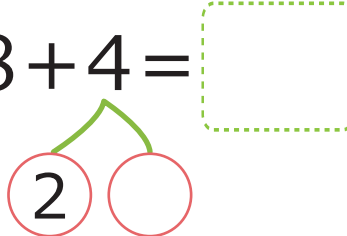
$$(10) 5 + 9 = \square$$


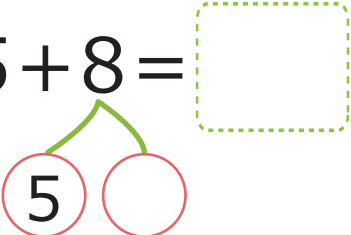
$$(14) 6 + 8 = \square$$


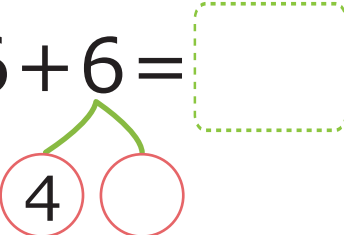
$$(3) 9 + 5 = \square$$


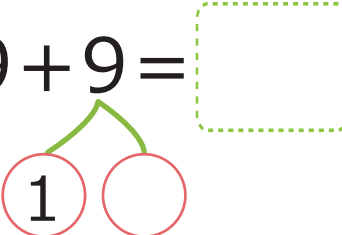
$$(7) 7 + 7 = \square$$


$$(11) 9 + 5 = \square$$


$$(15) 8 + 4 = \square$$


$$(4) 5 + 8 = \square$$


$$(8) 6 + 6 = \square$$


$$(12) 9 + 9 = \square$$


$$(16) 5 + 6 = \square$$
